



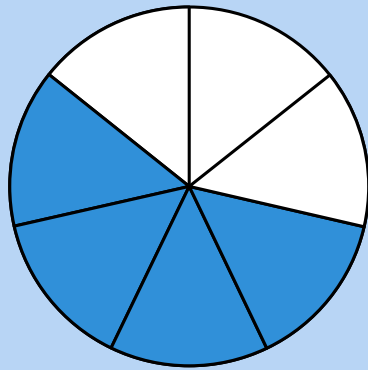
# LES FRACTIONS

## CM1-CM2-6ÈME



**Choisis la fraction** correspondante à chaque illustration.  
Attention, parfois plusieurs réponses sont possibles (il suffit de **simplifier la fraction**).


Pour rappel :



$$= \frac{\text{Nombre de parts colorées}}{\text{Nombre de parts totales}} = \frac{4}{7}$$

1

TEACHER&CO



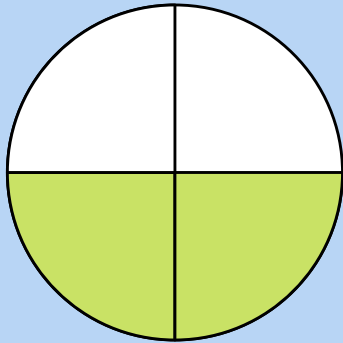
$$\frac{2}{4}$$

$$\frac{2}{1}$$

$$\frac{1}{2}$$

2

TEACHER&CO



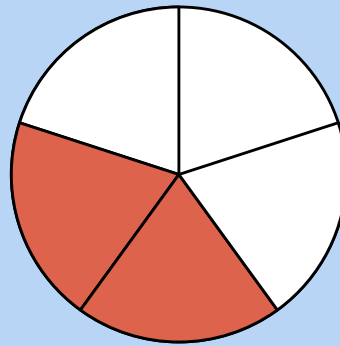
$$\frac{2}{4}$$

$$\frac{2}{2}$$

$$\frac{1}{2}$$

3

TEACHER&CO



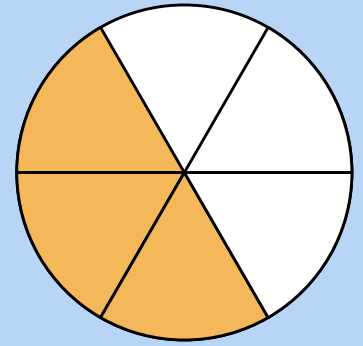
$$\frac{2}{4}$$

$$\frac{2}{5}$$

$$\frac{2}{3}$$

4

TEACHER&CO



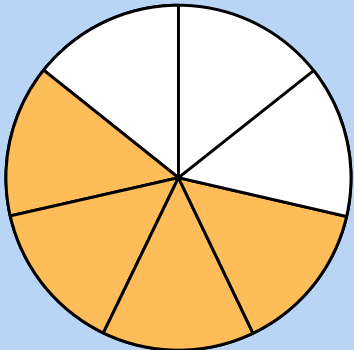
$$\frac{3}{6}$$

$$\frac{3}{3}$$

$$\frac{1}{2}$$

5

TEACHER&CO



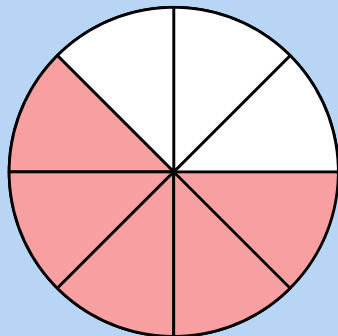
$$\frac{4}{7}$$

$$\frac{3}{4}$$

$$\frac{4}{3}$$

6

TEACHER&CO



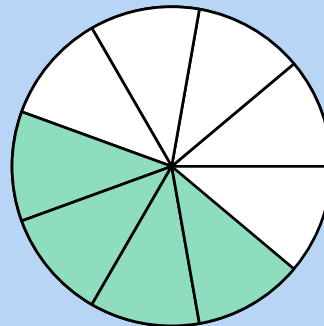
$$\frac{3}{4}$$

$$\frac{5}{3}$$

$$\frac{5}{8}$$

7

TEACHER&CO



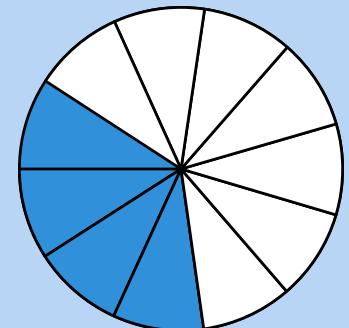
$$\frac{5}{4}$$

$$\frac{4}{9}$$

$$\frac{5}{4}$$

8

TEACHER&CO



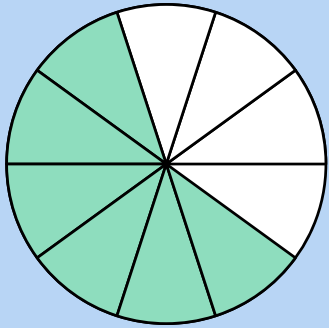
$$\frac{2}{9}$$

$$\frac{4}{11}$$

$$\frac{4}{7}$$

9

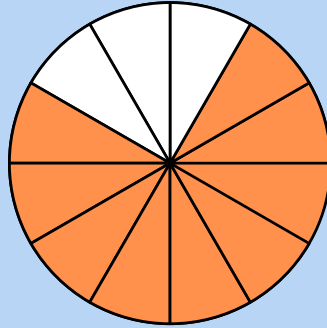
TEACHER&amp;CO



$\frac{10}{4}$	$\frac{6}{10}$	$\frac{4}{6}$
----------------	----------------	---------------

10

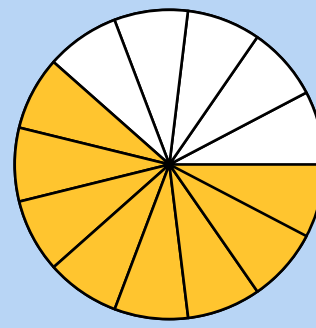
TEACHER&amp;CO



$\frac{9}{12}$	$\frac{3}{4}$	$\frac{12}{2}$
----------------	---------------	----------------

11

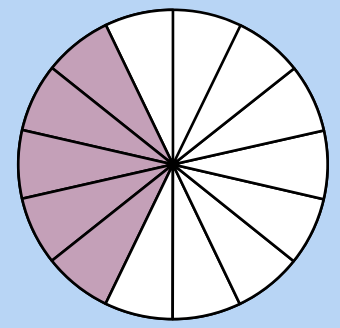
TEACHER&amp;CO



$\frac{8}{5}$	$\frac{8}{13}$	$\frac{4}{13}$
---------------	----------------	----------------

12

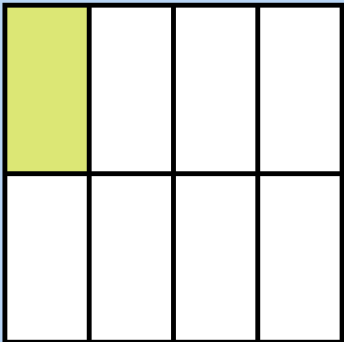
TEACHER&amp;CO



$\frac{9}{14}$	$\frac{5}{9}$	$\frac{5}{14}$
----------------	---------------	----------------

13

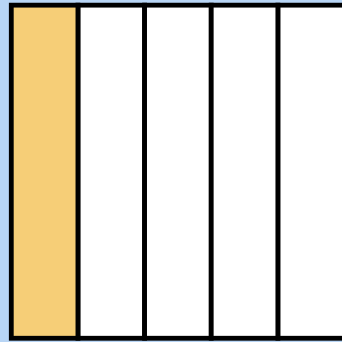
TEACHER&amp;CO



$\frac{1}{8}$	$\frac{1}{4}$	$\frac{4}{8}$
---------------	---------------	---------------

14

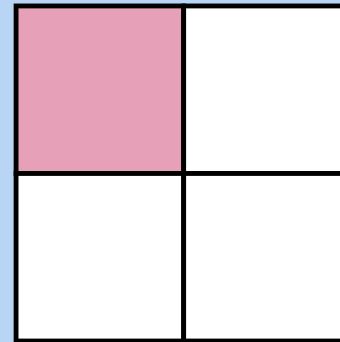
TEACHER&amp;CO



$\frac{4}{1}$	$\frac{1}{5}$	$\frac{5}{6}$
---------------	---------------	---------------

15

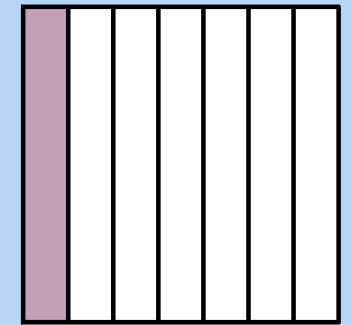
TEACHER&amp;CO



$\frac{1}{4}$	$\frac{1}{3}$	$\frac{3}{1}$
---------------	---------------	---------------

16

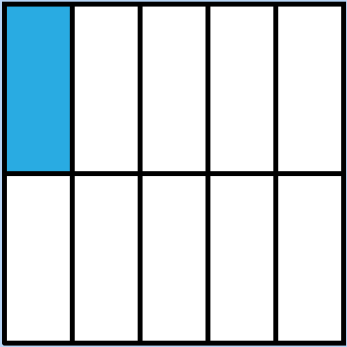
TEACHER&amp;CO



$\frac{1}{6}$	$\frac{1}{7}$	$\frac{1}{8}$
---------------	---------------	---------------

17


TEACHER&amp;CO



$\frac{9}{10}$	$\frac{1}{10}$	$\frac{1}{9}$
----------------	----------------	---------------

18


TEACHER&amp;CO



$\frac{1}{4}$	$\frac{1}{3}$	$\frac{2}{3}$
---------------	---------------	---------------

19

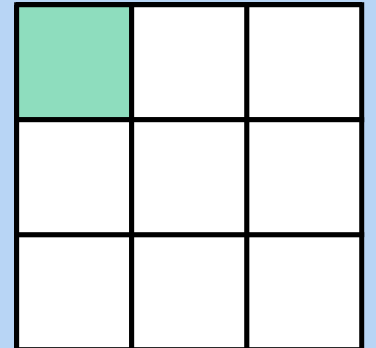
TEACHER&amp;CO



$\frac{1}{1}$	$\frac{2}{1}$	$\frac{1}{2}$
---------------	---------------	---------------

20

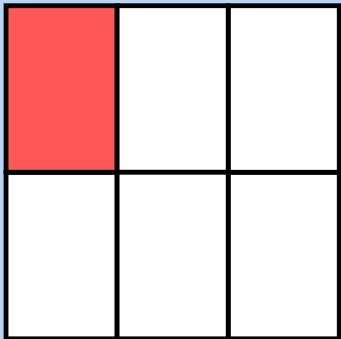
TEACHER&amp;CO



$\frac{8}{9}$	$\frac{3}{9}$	$\frac{1}{9}$
---------------	---------------	---------------

21

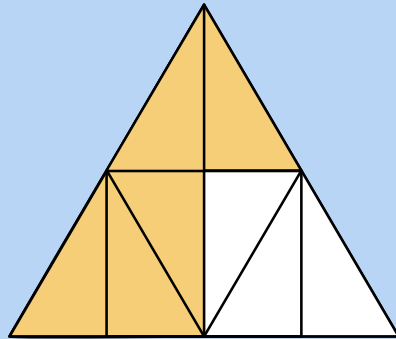
TEACHER&amp;CO



$\frac{1}{4}$	$\frac{6}{5}$	$\frac{1}{6}$
---------------	---------------	---------------

22

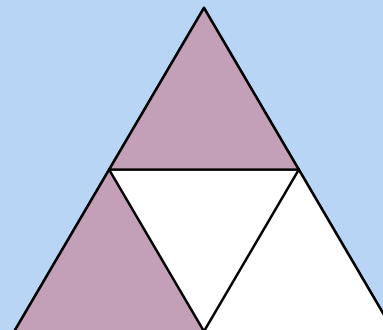
TEACHER&amp;CO



$\frac{5}{8}$	$\frac{4}{8}$	$\frac{3}{5}$
---------------	---------------	---------------

23

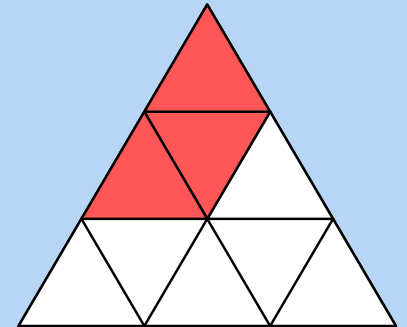
TEACHER&amp;CO



$\frac{1}{2}$	$\frac{2}{2}$	$\frac{2}{4}$
---------------	---------------	---------------

24

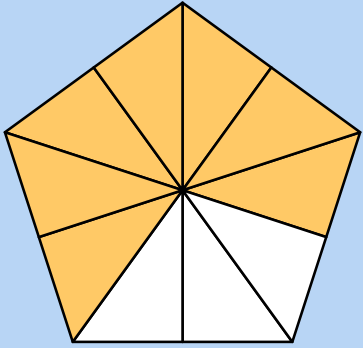
TEACHER&amp;CO



$\frac{3}{9}$	$\frac{1}{3}$	$\frac{3}{5}$
---------------	---------------	---------------

25

TEACHER &amp; CO




$$\frac{7}{3}$$

$$\frac{7}{10}$$

$$\frac{3}{7}$$

26

TEACHER &amp; CO



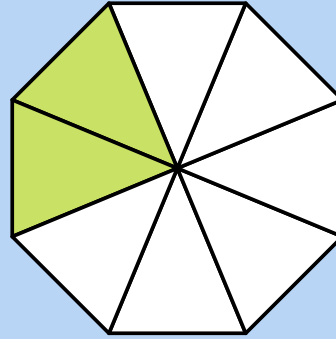
$$\frac{1}{4}$$

$$\frac{5}{4}$$

$$\frac{4}{5}$$

27

TEACHER &amp; CO



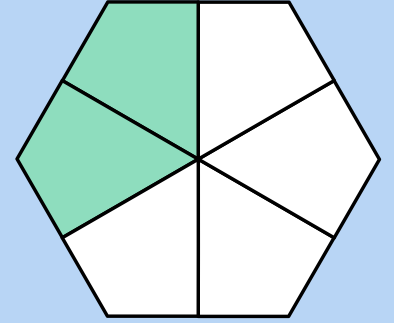
$$\frac{2}{8}$$

$$\frac{1}{4}$$

$$\frac{1}{2}$$

28

TEACHER &amp; CO




$$\frac{1}{3}$$

$$\frac{2}{6}$$

$$\frac{2}{4}$$

29

TEACHER &amp; CO



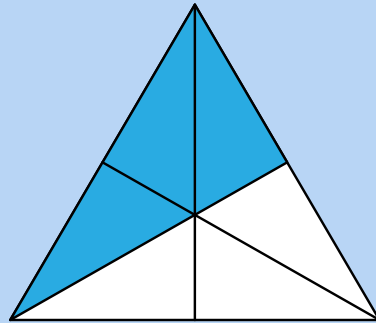
$$\frac{1}{4}$$

$$\frac{3}{4}$$

$$\frac{1}{3}$$

30

TEACHER &amp; CO



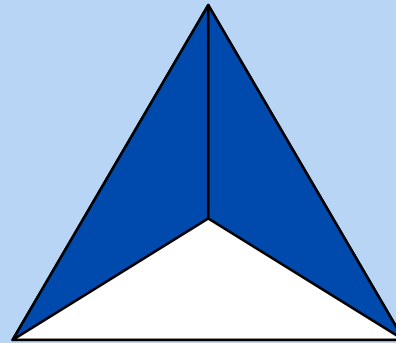
$$\frac{1}{2}$$

$$\frac{3}{4}$$

$$\frac{3}{6}$$

31

TEACHER &amp; CO



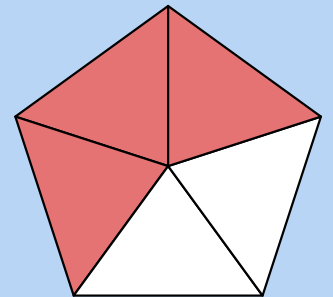
$$\frac{2}{3}$$

$$\frac{1}{2}$$

$$\frac{4}{6}$$

32

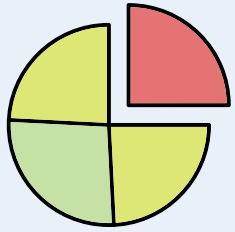
TEACHER &amp; CO



$$\frac{1}{4}$$

$$\frac{3}{5}$$

$$\frac{2}{3}$$



# Réponses Les fractions

## CM1-CM2-6ème



<b>1</b>	$\frac{1}{2}$	<b>2</b>	$\frac{1}{2} \quad \frac{2}{4}$	<b>3</b>	$\frac{2}{5}$	<b>4</b>	$\frac{1}{2} \quad \frac{3}{6}$
<b>5</b>	$\frac{4}{7}$	<b>6</b>	$\frac{5}{8}$	<b>7</b>	$\frac{4}{9}$	<b>8</b>	$\frac{4}{11}$
<b>9</b>	$\frac{6}{10}$	<b>10</b>	$\frac{9}{12} \quad \frac{3}{4}$	<b>11</b>	$\frac{8}{13}$	<b>12</b>	$\frac{5}{14}$
<b>13</b>	$\frac{1}{8}$	<b>14</b>	$\frac{1}{5}$	<b>15</b>	$\frac{1}{4}$	<b>16</b>	$\frac{1}{7}$
<b>17</b>	$\frac{1}{10}$	<b>18</b>	$\frac{1}{3}$	<b>19</b>	$\frac{1}{2}$	<b>20</b>	$\frac{1}{9}$
<b>21</b>	$\frac{1}{6}$	<b>22</b>	$\frac{5}{8}$	<b>23</b>	$\frac{1}{2} \quad \frac{2}{4}$	<b>24</b>	$\frac{1}{3} \quad \frac{3}{9}$
<b>25</b>	$\frac{7}{10}$	<b>26</b>	$\frac{4}{5}$	<b>27</b>	$\frac{1}{4} \quad \frac{2}{8}$	<b>28</b>	$\frac{1}{3} \quad \frac{2}{6}$
<b>29</b>	$\frac{3}{4}$	<b>30</b>	$\frac{1}{2} \quad \frac{3}{6}$	<b>31</b>	$\frac{2}{3}$	<b>32</b>	$\frac{3}{5}$